

U. S. Department of Agriculture

FOREST SERVICE

CHIPPewa NATIONAL FOREST

CORNERS OF THE PUBLIC SURVEY

T. 150 N R. 20 W 5 TH Mer.

Cont Corner common to Section 23

Corner consists of a POST in place


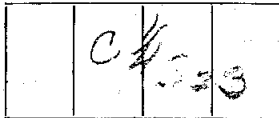
State condition 300 ft

Dimensions above ground 30 inches

Sketch grooves, letters, figures, or notches, on proper face or edge.

CARDINAL POSITION

DIAGONAL POSITION




N W S E

NW SW SE NE

Mound of is located

Pits are located

Sketch markings of Bearing Trees (or Rocks) in proper box and fill blanks below, giving bearings from Corner to Trees and Distances in Links.



Species

Diameter

Bearing

Distance

Do you believe this to be a genuine Land Office Corner? Yes

If not, why?

Harrison Adams (Signature)

12/19/34 (Date)

ccc asst. Forester (Title)

Metal Location Poster is on a _____ inches diameter, on the _____ side of _____ from which this Corner bears _____ chains distant.

Give any further facts which will aid in finding this Corner again.

<p>Sec. 14</p>	<p>Sec. 15</p>
<p>Sec. 16</p>	<p>Sec. 17</p>

(Make sketch of topography near Corner)

T. 150N. R. 20E. Mer.

Form 874-B—Revised May, 1918
U. S. Department of Agriculture
FOREST SERVICE

P 19

Chippewa NATIONAL FOREST

CORNERS OF THE PUBLIC SURVEY

T. 150 N R. 28 W 5th Mer.

Quarter (center) Corner common to Sections
23, _____, and _____

Corner consists of a Post (not) in place

State condition Good

Dimensions above ground 30 inches

Sketch grooves, letters, figures, or notches, on proper face or edge.

CARDINAL POSITION

DIAGONAL POSITION

C	2	3	23
N	W	S	E

NW	SW	SE	NE

Mound of _____ is located _____

Pits are located _____

Sketch markings of Bearing Trees (or Rocks) in proper box and fill blanks below, giving bearings from Corner to Trees and Distances in Links.

No bearing trees.			

Species _____

Diameter _____

Bearing _____

Distance _____

Do you believe this to be a genuine Land Office Corner? _____

If not, why? _____

N Adams
(Signature)

12/19/34
(Date)

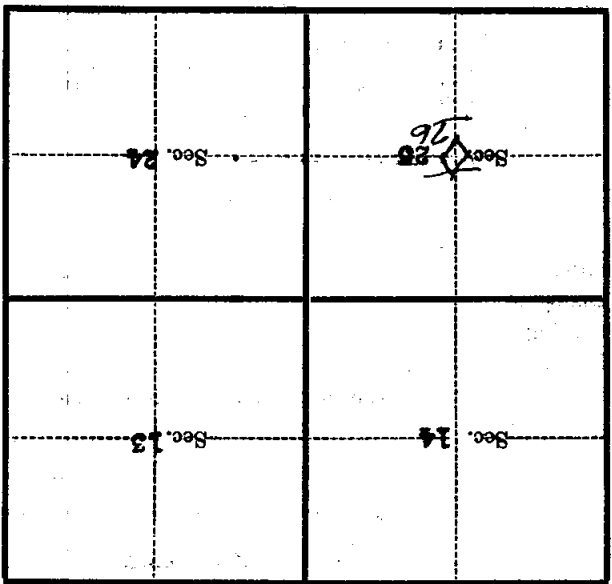
Asst. Leader 000

P-19

Series of horizontal dashed lines for writing.

Corner again.

Give any further facts which will aid in finding this
chains distant.
from which this Corner bears
side of
tree inches diameter, on the
Metal Location Poster is on a



(Make sketch of topography near Corner)