

U. S. Department of Agriculture
FOREST SERVICE

R

N 12

Chippewa

NATIONAL FOREST

CORNERS OF THE PUBLIC SURVEY

T. *147A* R. *27w* *5th* Mer.
M.C. Corner common to Sections

.....,, and *16*, and *21*
Corner consists of a *Iron Pipe* (not) in place

State condition *just created*

Dimensions above ground *1' - 26"* inches

Sketch grooves, letters, figures, or notches, on proper face or edge.

CARDINAL POSITION

DIAGONAL POSITION

<i>Mc</i>	<i>516</i>		
	<i>521</i>		
N	W	S	E

NW	SW	SE	NE

Mound of _____ is located _____

Pits are located _____

Sketch markings of Bearing Trees (or Rocks) in proper box and fill blanks below, giving bearings from Corner to Trees and Distances in Links.

<i>516</i>	<i>521</i>		
<i>BT</i>	<i>BT</i>		

Species *SP* *NP*

Diameter *5"* *20"*

Bearing *N 12 E 55'*

Distance *44* *30*

Do you believe this to be a genuine Land Office Corner?

If not, why? *gr*

(Signature)

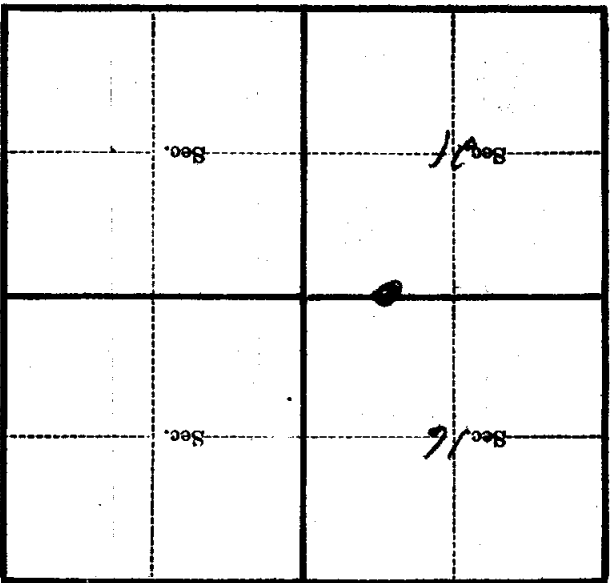
(Date)

(Title)

656

Metal Location Poster is on a _____ inches diameter, on the _____ side of _____ from which this Corner bears _____ chains distant.

Give any further facts which will aid in finding this Corner again.



(Make sketch of topography near Corner)

T. 147N R. 0327W 5TH Mer.

U. S. Department of Agriculture
FOREST SERVICE

Chippewa NATIONAL FOREST N-12

CORNERS OF THE PUBLIC SURVEY

T. 147N R. 27W 5 1/4 Mer.

Meander Corner common to Sections
16, and 21

Corner consists of a Iron Pipe in place



State condition Good

Dimensions above ground 1" - 2 1/2 inches

Sketch grooves, letters, figures, or notches, on proper face or edge.

CARDINAL POSITION


DIAGONAL POSITION



Mound of _____ is located _____

Pits are located _____

Sketch markings of Bearing Trees (or Rocks) in proper box and fill blanks below, giving bearings from Corner to Trees and Distances in Links.



Species JP NP

Diameter 5" 20"

Bearing N43 1/2 E S51 E

Distance 49 30

Do you believe this to be a genuine Land Office Corner? Yes

If not, why? _____

(Signature)

(Date)

(Title)

56

CORNERS OF THE TOPIC SURVEY

Give any further facts which will aid in finding this

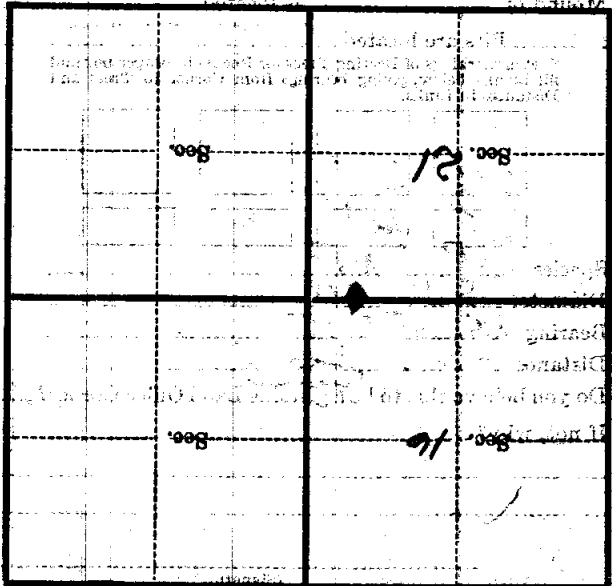
chain distant.

from which this corner bears

side of

tree inches diameter, on the

Metal Location Poster is on a



(Make sketch of topography near Corner)