

U. S. Department of Agriculture
FOREST SERVICE

J-15

Chippewa NATIONAL FOREST

CORNERS OF THE PUBLIC SURVEY

T. 141 N R. 25 W 5 Mer.
1/4

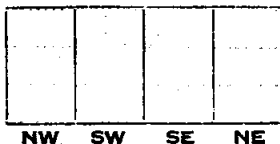
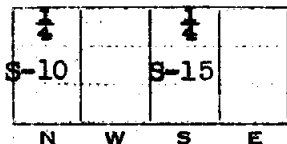
Corner common to Sections
10, and 15

Corner consists of a Scribed cedar post (not) in place
State condition poor

Dimensions above ground 30" inches
Sketch grooves, letters, figures, or notches, on proper face or edge.

CARDINAL POSITION

DIAGONAL POSITION



Mound of _____ is located _____

Pits are located _____

Sketch markings of Bearing Trees (or Rocks) in proper box and fill blanks below, giving bearings from Corner to Trees and Distances in Links.



Species _____
 Diameter _____
 Bearing _____
 Distance _____

Do you believe this to be a genuine Land Office Corner? Yes
 If not, why? _____

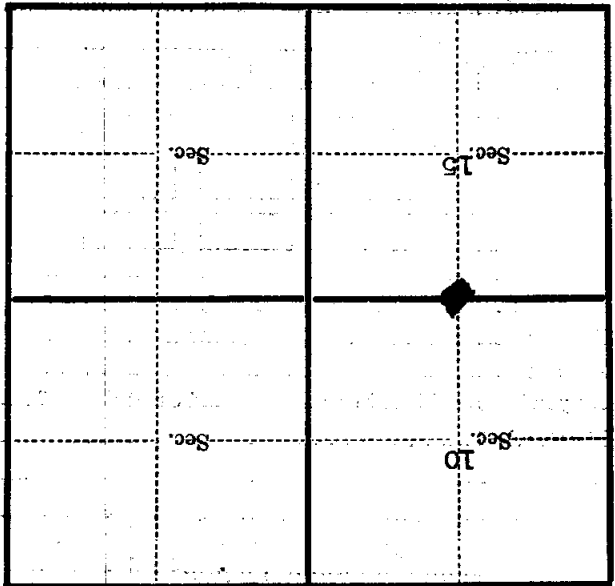
Raymond T. DeFant
 Raymond T. DeFant
 (Signature)

7-29-41
 (Date)

Raymond T. DeFant
 (Title)

Corner again.

Give any further facts which will aid in finding this
 chains distant.
 * 15
 from which this Corner bears
 S 61° W
 side of
 tree 7 inches diameter, on the Southwest
 Metal Location Poster is on a Birch



(Make sketch of topography near Corner)

U. S. Department of Agriculture
FOREST SERVICE

J-15

MISSISSIPPI NATIONAL FOREST

CORNERS OF THE PUBLIC SURVEY

T. 141 N R. 23W S. Mer.

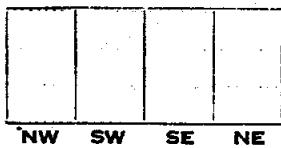
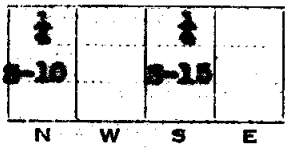
1/4 Corner common to Sections
10, and 15

Corner consists of a scribed cedar post in place
State condition good

Dimensions above ground 300 inches
Sketch grooves, letters, figures, or notches, on proper face or edge.

CARDINAL POSITION

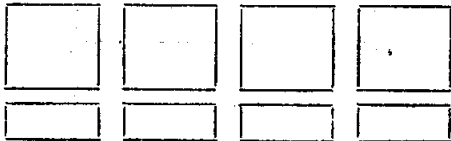
DIAGONAL POSITION



Mound of _____ is located _____

Pits are located _____

Sketch markings of Bearing Trees (or Rocks) in proper box and fill blanks below, giving bearings from Corner to Trees and Distances in Links.



Species _____
 Diameter _____
 Bearing _____
 Distance _____

Do you believe this to be a genuine Land Office Corner? Yes

If not, why? _____

Raymond T. DeFaut
 (Signature)

7-22-41
(Date)

Raymond T. DeFaut
(Title)

Handwritten notes on ruled lines, including the word "Sketch" written vertically.

Corner again.

Give any further facts which will aid in finding this

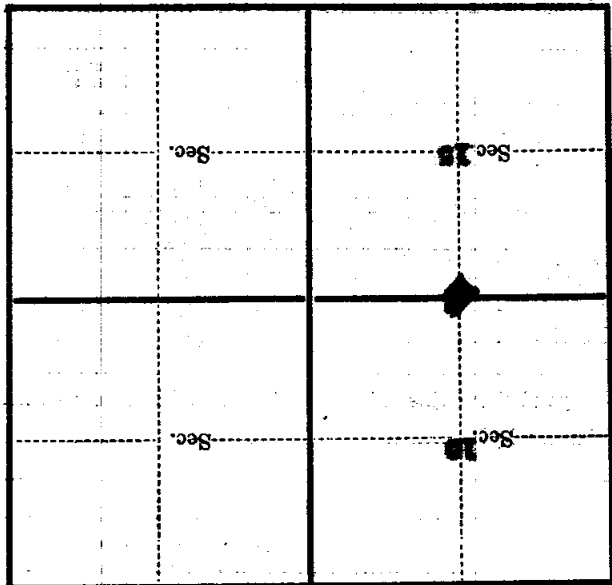
chains distant.

from which this Corner bears

side of

tree inches diameter, on the

Metal Location Poster is on a



(Make sketch of topography near Corner)