

M-23

U. S. Department of Agriculture

FOREST SERVICE

M-23

Chippewa NATIONAL FOREST

CORNERS OF THE PUBLIC SURVEY

T. 148 N R. 31 W 5th Mer.

#12 - 1/16 Corner common to Sections

-----, -----, and 13

Corner consists of a pipe (not) in place

State condition -----

Dimensions above ground 6" inches

Sketch grooves, letters, figures, or notches, on proper face or edge.

CARDINAL POSITION

DIAGONAL POSITION

--	--	--	--

N W S E

--	--	--	--

NW SW SE NE

Mound of ----- is located -----

Pits are located -----

Sketch markings of Bearing Trees (or Rocks) in proper box and fill blanks below, giving bearings from Corner to Trees and Distances in Links.

1/16			
BT			

Species T -----

Diameter 6" -----

Bearing SE -----

Distance 10 L -----

Do you believe this to be a genuine Land Office Corner? No

If not, why? County Survey

G. A. Bauch

(Signature)

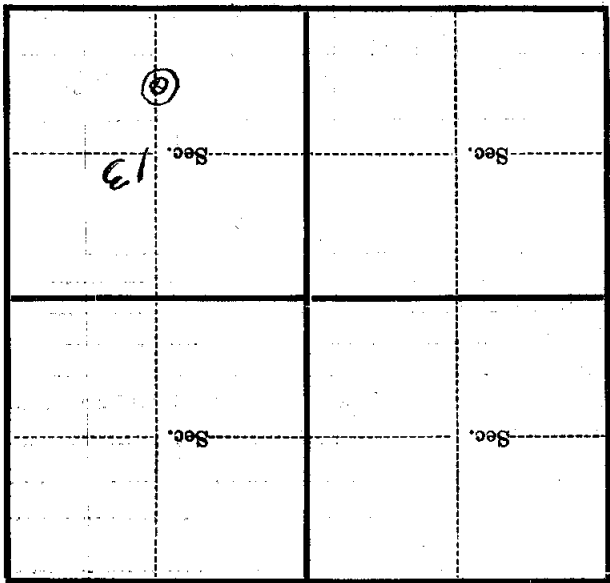
12/17/35

(Date)

J. Fr

(Title)

Metal Location Poster is on a tree inches diameter, on the side of from which this Corner bears chains distant. Give any further facts which will aid in finding this Corner again.



(Make sketch of topography near Corner)

T. 148N R. 31W
 5th. M-23
 Met. W-23

U. S. Department of Agriculture

FOREST SERVICE

m-23
m-23

Chippewa NATIONAL FOREST

CORNERS OF THE PUBLIC SURVEY

T. *148N* R. *31W* *5th* Mer.

12-1/16

Corner common to Sections

and *13*

Corner consists of a *pipe* ~~(not)~~ in place

State condition


good

Dimensions above ground *6"* inches

Sketch grooves, letters, figures, or notches, on proper face or edge.

CARDINAL POSITION

DIAGONAL POSITION



Mound of _____ is located _____

Pits are located _____

Sketch markings of Bearing Trees (or Rocks) in proper box and fill blanks below, giving bearings from Corner to Trees and Distances in Links.

<i>1/16</i>			
<i>BT</i>			

Species *T*

Diameter *6"*

Bearing *SE*

Distance *104.*

Do you believe this to be a genuine Land Office Corner? *No*

If not, why? *County Survey*

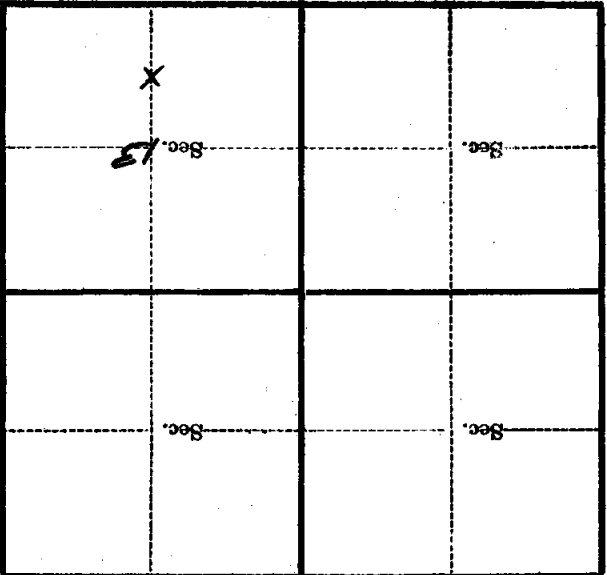
G.D. Bauch
(Signature)

S.F.
(Title)

12/17/35
(Date)

Corner again.

Give any further facts which will aid in finding this
 ----- chains distant.
 ----- from which this Corner bears
 ----- side of
 ----- tree ----- inches diameter, on the
 ----- Metal Location Poster is on a



(Make sketch of topography near Corner)

T. 148 N. R. 31 W. S. 14. M. 23
 Mel. W. 23