

U. S. Department of Agriculture

FOREST SERVICE

Chippewa NATIONAL FOREST

CORNERS OF THE PUBLIC SURVEY

T. 148 N. R. 30 W. 5th Mer.

#2 - 1/16 Corner common to Sections
 _____, _____, 6, and 7

Corner consists of a Pine (not) in place

State condition Good

Dimensions above ground 6 inches

Sketch grooves, letters, figures, or notches, on proper face or edge.

CARDINAL POSITION

DIAGONAL POSITION

--	--	--	--

N W S E

--	--	--	--

NW SW SE NE

Mound of _____ is located _____

Pits are located _____

Sketch markings of Bearing Trees (or Rocks) in proper box and fill blanks below, giving bearings from Corner to Trees and Distances in Links.

Species _____

Diameter _____

Bearing _____

Distance _____

Do you believe this to be a genuine Land Office Corner? Yes

If not, why? _____

G. D. Bauch

G. D. Bauch

(Signature)


Junior Forester

(Title)

12/9/35

(Date)

Metal Location Poster is on a tree inches diameter, on the side of from which this Corner bears chains distant. Give any further facts which will aid in finding this Corner again.



(Make sketch of topography near Corner)

T. 148 N. R. 30 W. 5th Mer.

Form 874-9—Revised May, 1918
U. S. Department of Agriculture
FOREST SERVICE

E-2

Chippewa NATIONAL FOREST

CORNERS OF THE PUBLIC SURVEY

T. *148N* R. *30W* *5th* Mer.

#2-116

Corner common to Sections

6, and *7*

Corner consists of a *pipe* (~~not~~) in place


State condition *good*

Dimensions above ground *6"* inches


Sketch grooves, letters, figures, or notches, on proper face or edge.

CARDINAL POSITION

DIAGONAL POSITION



N W S E



NW SW SE NE

Mound of _____ is located _____

Pits are located _____

Sketch markings of Bearing Trees (or Rocks) in proper box and fill blanks below, giving bearings from Corner to Trees and Distances in Links.



Species _____

Diameter _____

Bearing _____

Distance _____

Do you believe this to be a genuine Land Office Corner?

If not, why? _____

G. D. Bauch

(Signature)

12/9/35
(Date)

S. F.
(Title)

E-2

Corner again.

Give any further facts which will aid in finding this

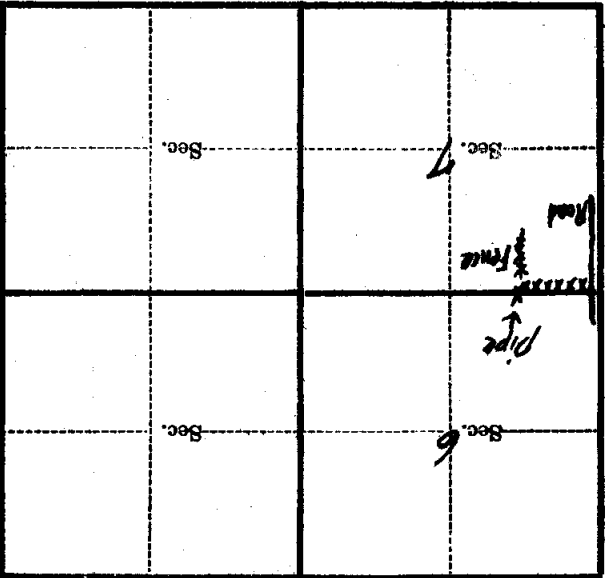
..... chains distant.

..... from which this Corner bears

..... side of

..... tree inches diameter, on the

..... Metal Location Poster is on a



(Make sketch of topography near Corner)

T. 148N R. 30W S. 5 E. 2 Met.