

YEALE OF THE ...

Corner again: **Corner 1 chain from Lane in order and**

Give any further facts which will aid in finding this **20 chains** chains distant.

from which this Corner bears

NE

Lane

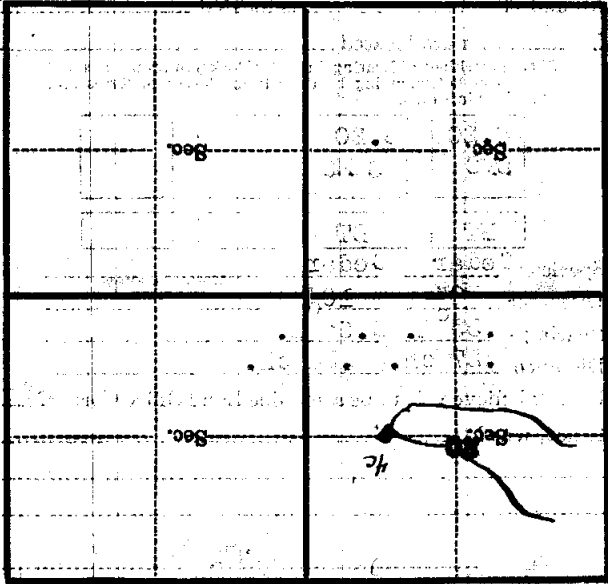
side of

tree **1** inches diameter, on the

South

Metal Location Poster is on a

Corner



(Make sketch of topography near Corner)

U. S. Department of Agriculture
FOREST SERVICE

P-8
done
P. 8

Chippewa NATIONAL FOREST

CORNERS OF THE PUBLIC SURVEY

T. 147 R. 31 5th Mer.

1/16 corner #8 Corner common to Sections
20, _____, _____, and _____

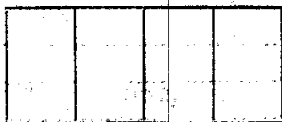

Corner consists of a G.I. Stake (not) in place
State condition Good

Dimensions above ground 10 inches

Sketch grooves, letters, figures, or notches, on proper face or edge.

CARDINAL POSITION

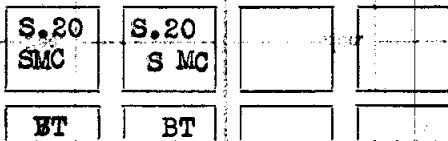
DIAGONAL POSITION



Mound of _____ is located _____

Pits are located _____

Sketch markings of Bearing Trees (or Rocks) in proper box and fill blanks below, giving bearings from Corner to Trees and Distances in Links.



Species Cedar Cedar

Diameter 8" 10"

Bearing N. 35° E. S. 65° E.

Distance .27 ch. .34 ch.

Do you believe this to be a genuine Land Office Corner? Yes

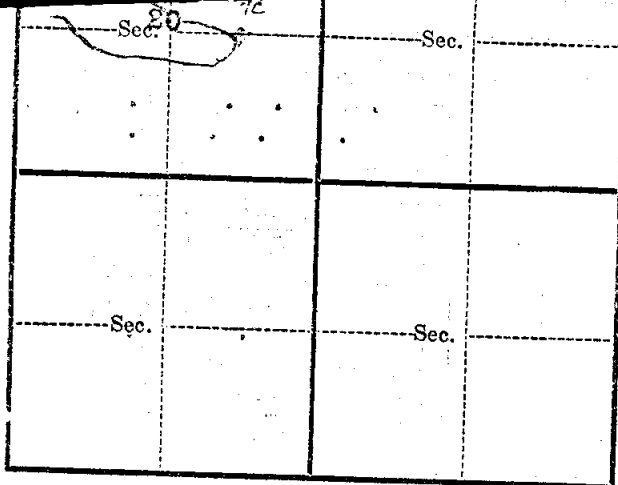
If not, why? _____

Murphy
Murphy
(Signature)

8/26/36
(Date)

Enrollee
(Title)

P. 8



Metal Location Poster is on a Cedar
 tree 8 inches diameter, on the South
 side of Line
 from which this Corner bears NW
.20 chains chains distant.

Give any further facts which will aid in finding this
 Corner again.

Corner 1 chain from Lake in Cedar and
Balsam swamp.

U. S. Department of Agriculture

FOREST SERVICE

Chippewa

NATIONAL FOREST

P. S. [Signature]

CORNERS OF THE PUBLIC SURVEY

T. 147 R. 31 5th Mer.

1/16 corner #8 Corner common to Sections 20, _____, and _____

Corner consists of a G.L. Stake (not) in place State condition Good

Dimensions above ground 10 inches

Sketch grooves, letters, figures, or notches, on proper face or edge.

CARDINAL POSITION

DIAGONAL POSITION

--	--	--	--

N W S E

--	--	--	--

NW SW SE NE

Mound of _____ is located _____

Pits are located _____

Sketch markings of Bearing Trees (or Rocks) in proper box and fill blanks below, giving bearings from Corner to Trees and Distances in Links.

S. 20
S MC

S. 20
S MC

--

--

BT

BT

--

--

Species Cedar Cedar

Diameter 8" 10"

Bearing N. 85° E. S. 65° E.

Distance .87 ch. .81 ch.

Do you believe this to be a genuine Land Office Corner?

If not, why?

(Signature)

(Title)

(Date)