

U. S. Department of Agriculture
FOREST SERVICE

Chippewa NATIONAL FOREST

CORNERS OF THE PUBLIC SURVEY

T. 147N R. R27W S. 5th - Mer.

Monahan Corner common to Sections

Corner consists of a Iron Pipe (not) in place



State condition Just Eaten

Dimensions above ground 1" - 27 inches

Sketch grooves, letters, figures, or notches, on proper face or edge.

CARDINAL POSITION


DIAGONAL POSITION



31 of 31 is located

Pits are located

Sketch markings of Bearing Trees (or Rocks) in proper box and fill blanks below, giving bearings from Corner to Trees and Distances in Links.



Species Ash ELM
Diameter 7" 2 1/2"
Bearing N 79 1/2° E S 67° W
Distance 52 LKS 70 LKS

Do you believe this to be a genuine Land Office Corner?
If not, why?

1936
(Date)

(Signature)

(Title)

Corner again.

Give any further facts which will aid in finding the

chains distant.

from which this Corner bears

side of

tree inches diameter, on the

Metal Location Poster is on a

	Sec.		Sec.
	Sec.	1	Sec.
R27w		R28w	

(Make sketch of topography near Corner)

T. 147N R. 27w 5th Mer.

U. S. Department of Agriculture
FOREST SERVICE

A to E-1

Chippewa NATIONAL FOREST
CORNERS OF THE PUBLIC SURVEY

T. 107N R. 27W 5th - Mer.

Monahan Corner common to Sections
_____, and _____

Corner consists of a Iron Pipe (not) in place

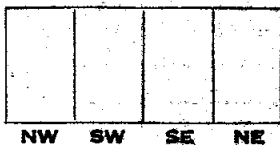

State condition Just set

Dimensions above ground 1" - 27 inches

Sketch grooves, letters, figures, or notches, on proper face or edge.

CARDINAL POSITION


DIAGONAL POSITION



Bound of _____ is located _____

Pits are located _____

Sketch markings of Bearing Trees (or Rocks) in proper box and fill blanks below, giving bearings from Corner to Trees and Distances in Links.



Species Ash Elm

Diameter 7" 11 1/2"

Bearing N79 1/2 E 5-6 1/2 W

Distance 197 1/2 to 70 1/2

Do you believe this to be a genuine Land Office Corner?

If not, why? _____

(Signature)

1996

(Date)

(Title)

BC-1

Metal Location Poster is on a _____
 trees _____ inches diameter, on the _____
 side of _____
 from which this Corner bears _____
 chains distant.
 Give any further facts which will aid in finding this
 Corner again.

	Sec.		Sec.
	Sec.	1	Sec.
	6	R280	R290

(Make sketch of topography near Corner)

T. 197N R. 27W S. 76 Mer.

~~W C~~
W C
M C

#4 from
N

South Shore

M. Pedgion

