

U. S. DEPARTMENT OF AGRICULTURE
FOREST SERVICE

posted.

Chippewa NATIONAL FOREST

CORNERS OF THE PUBLIC SURVEY

T. 143 N R. 30 W 5th Mer.
14. C. Corner common to Sections

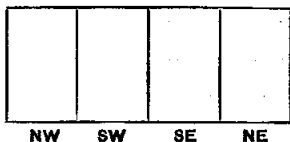
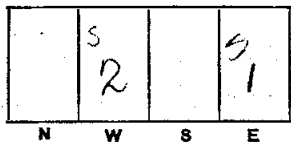
1, 2, and

Corner consists of a IRON STAKE (not) in place
State condition

Dimensions above ground _____ inches.
Sketch grooves, letters, figures, or notches, on proper face or edge.

CARDINAL POSITION

DIAGONAL POSITION



Mound of _____ is located _____

Pits are located _____

Sketch markings of Bearing Trees (or Rocks) in proper box and fill blanks below, giving bearings from Corner to Trees and Distances in Links.

TREE N
R 30 W
S 1 M C

TREE N
R 30 W
S 2 M C

BT

BT

Species Maple Maple
Diameter 7 9
Bearing N 50 E S 21 W
Distance 10 7

Do you believe this to be a genuine Land Office Corner? Yes
If not, why? _____

A. R. Brewer

Signature.

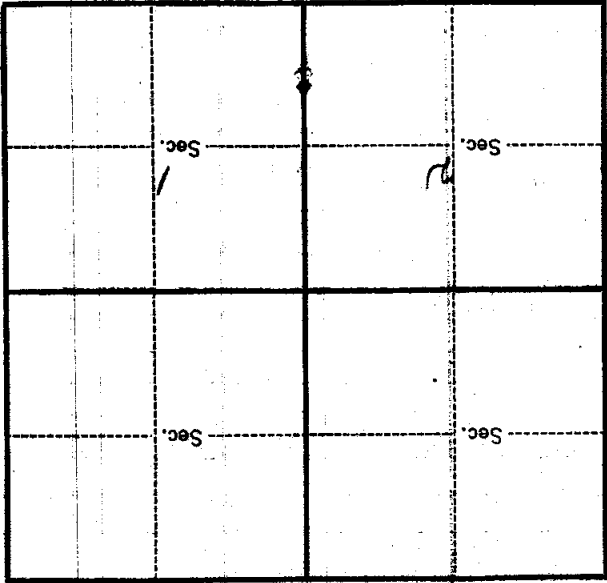
Estimator

Title.

12/3/1930
Date.

Corner again.

Give any further facts which will aid in finding this
chains distant.
from which this Corner bears
side of
tree inches diameter, on the
Metal Location Poster is on a



(Make sketch of topography near Corner.)

T. 143N. R. 30W. 5th
C-D-21 Mer.

U. S. DEPARTMENT OF AGRICULTURE
FOREST SERVICE

posted

Chippewa NATIONAL FOREST

C-D-21

CORNERS OF THE PUBLIC SURVEY

T. 143 N R. 30 W S. 2 Mer.

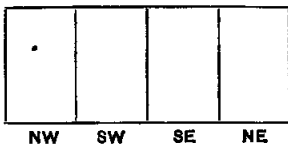
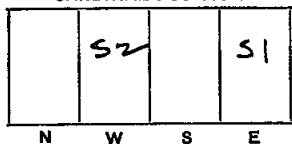
MC Corner common to Sections
2, 1, and

Corner consists of a IRON stake (not) in place
State condition

Dimensions above ground 8" inches.
Sketch grooves, letters, figures, or notches, on proper face or edge.

CARDINAL POSITION

DIAGONAL POSITION



Mound of ✓ is located ✓

✓ Pits are located

Sketch markings of Bearing Trees (or Rocks) in proper box and fill blanks below, giving bearings from Corner to Trees and Distances in Links.

T143N
R30W
S2 MC

T143N
R30W
S1 MC

B.T.

B.T.

Species Maple Maple

Diameter 9" 8"

Bearing S18°W N50E

Distance 9 ft. 14 ft.

Do you believe this to be a genuine Land Office Corner? Yes

If not, why?

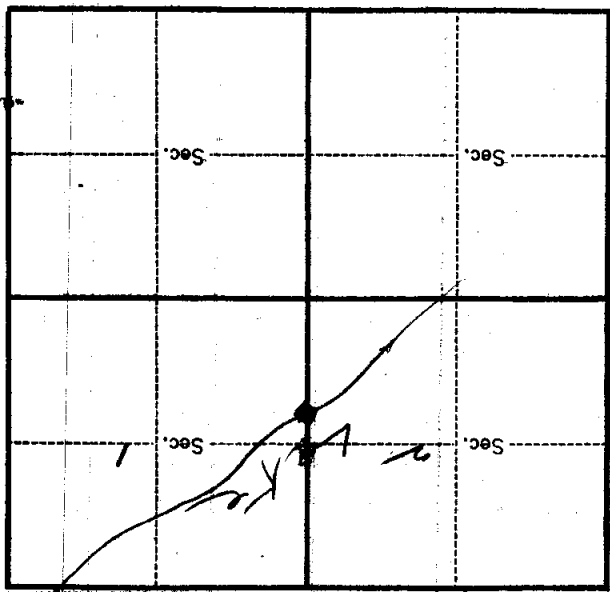
12/2/30
Date.

[Signature]
Signature.
A.O.P.
Title.

T. 145 N. R. 30 W. 5-4-C-D-21 Mer.

9-3021

(Make sketch of topography near corner.)



Metal Location Poster is on a

tree _____ inches diameter, on the

side of _____

from which this Corner bears _____

_____ chains distant.

Give any further facts which will aid in finding this

Corner again.

On bank 2 ch 5 2 rods.